



# Atomic Energy Education Society

Anushaktinagar, Mumbai-400094

**S A-2 (2016-17)**

Date: 08.03.2017

**Subject- E.V.S**

**Class- II**

**Time- 2 Hours**

**Max Marks-50**

**Name:** ..... **Section:** ..... **Roll Number:** .....

**School & Center:** .....

**Invigilator's Signature:** ..... **Examiner's Signature:** .....

**Checker's Signature:** ..... **Marks Obtained:** .....

**Q .1 Fill in the blanks.**

**(1/2X8=4 M)**

- a) People who cannot speak use \_\_\_\_\_ language.
- b) The President of India takes the \_\_\_\_\_ in the parade of Republic Day.
- c) Always walk on the \_\_\_\_\_
- d) Today is Monday, yesterday was \_\_\_\_\_
- e) A lawyer works in a \_\_\_\_\_
- f) Pots, pans and knives are the tools of a \_\_\_\_\_
- g) The stars twinkle at \_\_\_\_\_
- h) People use a log or a raft to move over \_\_\_\_\_

**Q.2 Put a ✓ against the correct answer.**

**(1/2X8=4 M)**

a) Some people play Ghatam as a

- (i) musical instrument [ ] (ii) exercise [ ] (iii) medicine [ ]

b) Santa Claus gives us gifts on

- (i) Christmas [ ] (ii) Holi [ ] (iii) Eid [ ]

c) We should not take

- (i) grains and cereals [ ] (ii) milk [ ] (iii) fizzy drinks [ ]

d) Who teaches us in the school?

- (i) teachers [ ] (ii) neighbours [ ] (iii) leaders [ ]

e) Who wears a long cap and an apron?

- (i) lawyer [ ] (ii) chef [ ] (iii) doctor [ ]

f) The doctor of animals is called

- (i) pilot [ ] (ii) lawyer [ ] (iii) veterinarian [ ]

g) On Independence Day Prime Minister hoists the flag at

- (i) Red fort [ ] (ii) Taj Mahal [ ] (iii) Azad Maidan [ ]

h) Onam is celebrated in

- (i) Kerala [ ] (ii) Jammu & Kashmir [ ] (iii) Haryana [ ]

**Q.3 Strike off the wrong word.**

**(1/2X6=3 M)**

a)  $\frac{3}{4}$  of earth is covered with water/land.

b) In winters we like to drink hot soap / soup.

c) I saw a time / tame dog.

d) One year has 365/30 days.

e) My sister is very week / weak.

f) We can see full moon on Purnima/Amavasya.

**Q.4** Match the following.

**(1/2X8=4M)**

**A**

- a) Milk
- b) design
- c) spring season
- d) Education
- e) Mudra
- f) Telephone
- g) E-mail
- h) Post card

**B**

- i) wall hangings
- ii) dancer
- iii) builds strong bones
- iv) Two way communication
- v) Internet
- vi) flower blooms
- vii) Post officer
- viii) to learn skills

**Q.5. Name the following**

**(1 x 5 = 5 M)**

- a. A means of water transport \_\_\_\_\_
- b. An harvest festival \_\_\_\_\_
- c. One job/occupation \_\_\_\_\_
- d. The seventh month of the year \_\_\_\_\_
- e. Material used for dyeing \_\_\_\_\_

**Q.6 Complete the sentence**

**(1X5=5 M)**

- a) Republic Day is celebrated on \_\_\_\_\_ .
- b) The snake boat races are held at \_\_\_\_\_ .
- c) A vehicle in which manpower is used \_\_\_\_\_ .
- d) Valleys lie between two \_\_\_\_\_ .
- e) Pandit Nehru's birthday is celebrated as \_\_\_\_\_ .

**Q 7 Name the pictures.**



**(1X5=5M)**



-----

-----

-----



-----

-----

**Q. 8 Write the answer in one sentence.**

**(1X5=5 M)**

**a) What games do you like to play?**

\_\_\_\_\_

**b) When do you wear woollen clothes?**

\_\_\_\_\_

**c) How can you contact someone immediately?**

\_\_\_\_\_

**d) Write any one road safety rule?**

\_\_\_\_\_

e) Why India is called land of festivals?

---

**Q.9. Write the answer in three sentences.**

**(2X3=6 M)**

a) Why is it not good to eat fast food?

---

---

---

---

---

b) Name the people who help you at home or in school. Write one sentence about each.

---

---

---

---

---

**Q.10. Draw and label.**

**(2X2=4)**


a) Traffic lights using colours.

b) A clock to show time **7 O' clock** without colours.



11. Join the dots in the picture and complete the sentence below it

(1 x5 = 5M)



a) People carry \_\_\_\_\_ to protect themselves from rain.

b) In rainy season the sky is covered with \_\_\_\_\_.

\*\*\*\*\*